

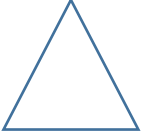







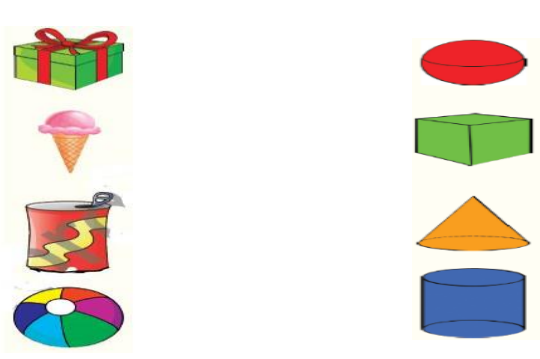
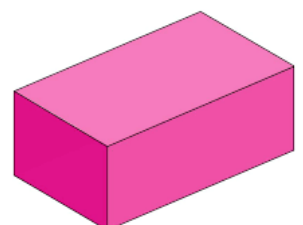
Date: 20/10/2022
GRADE: II

TERM 1 (2022-23)
MATHEMATICS

Max marks: 40
Time: 2 hours

Name :

Q.No.	Questions	Mark										
I	Choose the correct answer for the following questions.	10x1=10										
1.	Which of the following shapes does have curved lines? a)  b)  c) 											
2.	The number that comes before 72 is: a) 71 b) 70 c) 73											
3.	In this picture, what is the shape of the pencil? a) Cylinder b) cube c) cone											
4.	Choose the even number from among the following. a) 31 b) 46 c) 57											
5.	The object which can slide is: a)  b)  c) 											
6.	$18 + 5 = \underline{\quad\quad} + 18$ a) 18 b) 5 c) 15											
7.	Which of these numbers has curved lines? a) 17 b) 41 c) 30											
8.	Choose the bigger number from among the following. a) 56 b) 45 c) 63											
9.	Anu has 11 rose plants in his garden. He gives 7 plants to his aunt. How many plants does Anu has now? a) 18 b) 10 c) 17											
10.	Look at the table below. The letter 'M' is in the _____ position. <table border="1" data-bbox="245 1845 624 1962"><tr><td>K</td><td>T</td><td>R</td><td>S</td><td>W</td><td>Z</td><td>X</td><td>M</td><td>A</td><td>U</td></tr></table> a) 5th b) 8th c) 10th	K	T	R	S	W	Z	X	M	A	U	
K	T	R	S	W	Z	X	M	A	U			

II	Fill in the blanks.	4x1=4								
11. 12. 13. 14.	The biggest 2-digit number is _____. 5 tens and 6 ones make the number _____. $8 + 4 =$ _____. $72 + 0 =$ _____.									
III	State whether the following sentences are true or false.	2x1=2								
15. 16.	The number name for 14 is forty. _____ The smallest 2-digit number using the digits 8 and 3 is 38. _____									
IV	Match the objects with the shapes they look like.	4x1=4								
17. 18. 19. 20.										
V	Answer the following questions.									
21. 22. 23.	Regroup the following. <table border="1" data-bbox="239 1433 446 1523"> <tr><td>T</td><td>O</td></tr> <tr><td></td><td>26</td></tr> </table> <table border="1" data-bbox="654 1433 861 1523"> <tr><td>T</td><td>O</td></tr> <tr><td></td><td></td></tr> </table> Draw the plane shape for the solid shapes.  _____	T	O		26	T	O			2 1
T	O									
	26									
T	O									

a) T O
 2 5
 + 4 3

b) T O
 1 6
 3 2
 +4 1

c) T O
 6 7
 +1 5

24 Laya has 15 toffees, Daya has 11 and Manu has 13. How many toffees do they have in all?

3

Toffees Laya has _____

Toffees Daya has _____

Toffees Manu has _____

Toffees they have in all _____

T	O

25 Circle the smallest number in each pair.

2

a) 49 94

b) 80 18

26. Group in pairs, write the number of objects and tell whether the number is even or odd. Write 'E' for even and 'O' for odd.

2





27. Arrange the following numbers in ascending order.

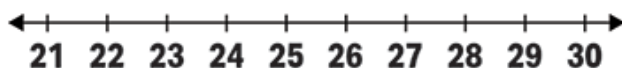
2

63,25 ,40,16,73 _____

28. Add the numbers using the number line.

2

25 + 4 = _____



2